

WINTER BREAK HOME WORK(18-19)

CLASS III



NOTE:-

- Holiday homework is compulsory for all the students and it carries weightage.
 - Revise all the bookwork and copy work done in Nov. & Dec.
 - Do all the Mock Papers in their respective subject practice Note-Books.
 - Written Mock Paper to be done in Neat handwriting.
-

MOCK TEST PAPER(2018-19)

SUBJECT-ENGLISH

CLASS-III

TIME: 3 HRS

M.M:70

Note-

1. All the questions are compulsory.
2. Marks are allotted against each question.
3. Read the questions carefully.
4. The question paper contains three sections-

SECTION-A (READING)	10 Marks
SECTION-B(WRITING&GRAMMAR)	30 Marks
SECTION-C (MAIN COURSE)- Dictation	20 Marks 5 Marks
Home Assignment-	5 Marks
TOTAL	<u>70 Marks</u>

SECTION-A(Reading)

1. Read the following passage carefully and answer the following questions carefully. (10)

Once there lived a poor man called Gopal. He used to cut wood. One day Gopal was chopping the tree on the river bank. The axe slipped and fell into the river. He prayed to the river goddess" Please show mercy on me. Oh! river goddess", he said. I am very poor and cannot buy another axe. Please give me my axe.

First the river goddess showed Gopal a golden axe."Is this your axe?",the river goddess asked.

"No", said Gopal."My axe is not made of gold."

The river goddess showed Gopal a silver axe."No ", said Gopal. Then the river goddess took out a steel axe and said, " Is this axe yours?" "Yes, this is mine. " said Gopal. The river goddess gave him his axe. She also gave him the other two axes as a reward for his honesty.

Complete these sentences.

1. Gopal was _____ the tree on _____ (2)
2. Gopal was very _____ and could not buy another _____. (2)
3. First the river goddess showed Gopal a _____ axe.Next she showed him _____axe. (2)
4. Gopal's axe was made of _____. (1)
5. The river goddess gave Gopal _____axes as a _____ for his _____. (3)

SECTION-B (Writing &Grammar)

(30)

- Q1.Write an application to the principal asking for a day leave. (5)

- Q2.Complete these sentences using 'must' with the verbs given in the help box. (5x1=5)

eat	talk	have	stop	buy
-----	------	------	------	-----

1. I am very thirsty. I _____a drink.
2. The traffic lights are red. You _____.
3. The baby is asleep . You _____quietly.
4. This dress would suit you. You _____it.
5. You are too fat. You _____ it.

- Q3. Underline the adverbs in the following sentences.

(5x1=5)

1. I answered the questions easily.
2. The soldiers fought bravely.
3. The girl writes neatly.
4. The play will begin now.
5. The man shouted loudly.

Q4. Fill in the blanks with correct preposition.

(5x1=5)

in	on	to	at	for	Between
----	----	----	----	-----	---------

1. Ram is sitting in _____ Rohan and Rihaan.
2. We are waiting _____ Peter.
3. My uncle lives _____ Delhi.
4. The stars shine _____ night.
5. Can you meet me _____ 4:30 pm. ?

Q5. Underline the conjunctions in the following sentences.

(5x1=5)

1. He is ill but cheerful.
2. She will come if you invite her.
3. Jack and Jill went up the hill.
4. Would you like tea or coffee?
5. He was late to school because he missed his bus.

Q6. Fill in the blanks with suitable interjections.

(5x1=5)

bravo	hurrah	shh	wow	oouch
-------	--------	-----	-----	-------

1. _____! We have won.
2. _____! I have burnt my hand on the kettle.
3. _____! Good shot.
4. _____! Walk quietly.
5. _____! What a tall building?

SECTION –C (MCB)

(20)

Q1 Tick the correct answer.

(3x1=3)

1. Helen Keller was born in _____.
a) America b) India c) Sydney
2. The idea of ministers of Ultapur was to _____.
a) Wake up at night and go to sleep during the day.
b) Wake up at day and sleep during the night.
3. Jiya was _____ years old.
a)Five b)Eleven c)Fifteen

Q2. Jumbled sentences.

(3x1=3)

1. am gong/I/a/for/walk/woods/in/the
2. the/on/many/sang/we/songs/bus
3. nest/the/in/sat/bird/the

Q . 3. Word Meanings.

(6x1=6)

1. clung
2. excellent
3. pebbles
4. imitate
5. puzzled
6. trek

Q . 4. Answer the following questions.

(4x2=8)

1. What did Helen notice about others?
2. Why did the seven people feel hopeless?
3. Why did the ministers of Ultapur change the new law?
4. How did Miss Sullivan speak to Helen?

Q .5.Dictation

(5)

Q .6. Home assignment.

(5)

Mock Paper
CLASS – III
Sub – MATHS

M.M.:- 70

GENERAL INSTRUCTIONS :-

- All questions are compulsory.
- Do the calculations carefully.
- Rough work to be done in the rough column on the right hand side.
- Write in neat handwriting.

SECTION – A

Q1. Choose the correct option (5×1=5)

- 1) This is a part of a line having two endpoints.
a) line b) ray c) line segment d) point
- 2) A fraction in which the numerator is greater than the denominator is called _____ fraction.
a) Unit b) Proper c) Mixed d) Improper
- 3) In a leap year, the month February has ____ days.
a) 31 b) 28 c) 30 d) 29
- 4) How many ml make 1l?
a) 5 b) 500 c) 1000 d) 100
- 5) In one hour, the minute hand of a clock moves _____ minutes.
a) 60 b) 30 c) 15 d) 45

Q2. Fill in the blanks :- (5×1=5)

- a) 2862 ml = _____ l + _____ ml.
- b) 5:45 is the same as _____.
- c) A numeral which is a combination of a whole number and a fractional number is called a _____.
- d) _____ figures have the same starting and end point.
- e) Quarter hour = _____ minutes.

Q3. Write True or False for the following statements :- (5×1=5)

- a) The standard unit to measure large quantity of liquids is called Millilitre (ml). _____
- b) The time from 12o' clock midnight to 12o' clock noon is called p.m. _____
- c) An object is said to be symmetrical when both of its halves are exactly the same. _____
- d) When the numerator is same, then the fractional number that has smaller denominator is greater. _____
- e) Each big division on the clock has four small divisions. _____

SECTION – B

Q4. Compare <, > or = (2)

- a) $\frac{8}{9}$ _____ $\frac{2}{9}$ b) $\frac{2}{8}$ _____ $\frac{2}{7}$

Q5. What time will it be 3 hours after the given time? (2)

- a) 3:30 a.m. b) midnight

Q6. Convert 7 L 50 ml into ml . (2)

Q7. Write fractions with :- (2)

- a) 1 as numerator and 8 as denominator.
- b) 7 as denominator and 2 as numerator.

Q8. Observe the following pattern and write the next number :- (2)

- a) $13 + 5 = 18$
 $13 + 15 = 28$
 $13 + 25 = \underline{\hspace{2cm}}$
 $13 + 35 = \underline{\hspace{2cm}}$
- b) 5, 7, 10, 14, _____, _____.

Q9. Convert 52 weeks into days. (2)

Q10. Change $12\frac{1}{8}$ into an improper fraction. (2)

Q11. Subtract 5 L from 10 L 795 ml. (2)

Q12. Write the time shown on each of these clocks in words :- (2)



a)



b)

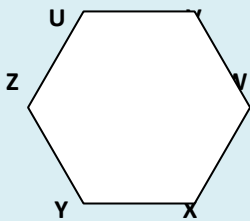
Q13. Draw a line segment of 6 cm. (2)

Q14. Solve the following :- (2)

- a) $\frac{2}{8} + \frac{5}{8} + \frac{1}{8} = \underline{\hspace{2cm}}$
- b) $\frac{9}{11} - \frac{4}{11} = \underline{\hspace{2cm}}$

SECTION – C

Q15. How many line segments are required to make the given figure and also name them. (3)



Q16. Add :- (3)

$95\text{ L }405\text{ ml} + 140\text{ L }27\text{ ml} + 72\text{ ml} + 806\text{ ml}.$

Q17. My mother leaves for office at 8:00 a.m. and reaches home at 6:00 p.m. How many hours is she away from home ? (3)

Q18. a) Arrange in Ascending order :-

$$\frac{2}{5}, \frac{2}{8}, \frac{2}{7}, \frac{2}{10}, \frac{2}{3}$$

B) Choose the figures that are symmetrical.

a) R b) I c) O d) E e) S

(1.5 × 2 = 3)

Q19. A cow gives 12 L of milk at a time. The calf drank 1 L 325 ml of milk. How much milk is left with the milkman ?

(3)

SECTION – D

Q20. a) Write the number of hours between 9:00 a.m. and 4:00 p.m.

b) Change $\frac{56}{9}$ into mixed fraction .

(2 × 2 = 4)

Q21. A shopkeeper had 57 L 287 ml of oil. He sold 22 L 863 ml to one customer and 19L 662 ml to another customer. How much oil is left with him?

(4)

Q22. Dodging tables:

(5)

- | | |
|------------------|------------------|
| a) 13 x 7 = ____ | f) 19 x 2 = ____ |
| b) 14 x 3 = ____ | g) 16 x 4 = ____ |
| c) 17 x 6 = ____ | h) 13 x 5 = ____ |
| d) 12 x 8 = ____ | i) 17 x 7 = ____ |
| e) 15 x 4 = ____ | j) 14 x 9 = ____ |

Q 23. Holiday Homework (H. H.W)

(5)

MOCK TEST PAPER(2018-19)
SUBJECT-SCIENCE
CLASS-III

M.M-70

Q1 Fill in the blanks

(6)

- a. Cross the road at the _____ crossing.
- b. Dustbins should be kept covered to keep away_____
- c. Light travel in ___line
- d. Force can change the _____of an object
- e. Huge Pot holes on the moon surface are called _____
- f. Strong winds cause _____

Q2 Write true or false and rectify the following statements

(6)

- a. Do not touch electrical gadgets with wet hands.
- b. First aid should be given to an injured person after an hour.
- c. The moon reflect the light of the sun.
- d. We should encourage the use of horns.
- e. There is no air or water on the moon.
- f. Man first landed on the moon in the 1996.

Q3 Give one word of the following

(6)

- a. An underground passage for crossing a road_____
- b. Objects which do not give light_____
- c. A first Indian women to go in to space_____
- d. A first man who stepped on the surface of the moon_____
- e. Solids form of water_____
- f. A vehicle designed for travel in space_____

Q4 Give two examples of

(2)

- a. Pleasant sound –
- b. Unpleasant sound-

Q5 Match the column

(5)

A

B

- | | |
|-----------------|---------------------|
| i) Monsoon | a) push or pull |
| ii) Astronauts | b) dark image |
| iii) Shadow | c) season |
| iv) Force | d) force of gravity |
| v) Issac Newton | e) space |



Q6 Complete the table

(2)

Name	WEIGHT ON EARTH	WEIGHT ON MOON
HASAN	24 kg	
HARJIT	21 kg	

Q7 write the name of the process:

(2)



Q7 Define the terms

(2)

- a) Ray
- b) breeze

Q8 Identify the picture and write the name below it

(2)



Q9 Circle the luminous objects

(2)

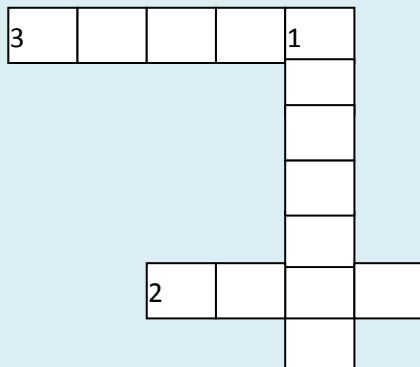


Q10 Unscramble the words (3)

- a) potafoth-_____
- b) acesp-_____
- c) ummsr-_____

Q11 Read the clues and solve the crossword puzzle (3)

- 1) We throw garbage in
- 2) On cooling tiny drops become heavy in clouds and fall as
- 3) Too much of rain can cause



Q.12 Answer the following questions (8)

- a) Why should things like toys , bags and shoes not be left on the floor?
- b) What can we do to reduce noise?
- c) What astronauts do in space? Why do astronauts wear special suits ?
- d) How do floods affect our life?

Q13 Think and answer (4)

- a) Why is a cloudy night warmer than a night when the sky is clear?
- b) During thunderstorm, Sara saw lightning first and then thunder. Why is it so?

Q14 How solar eclipse is formed ? Explain with the help of the diagram. (4)

Q15 Draw a well labelled diagram of water cycle. (3)

Q.16. DICTATION (5)

Q. 17 H.H.W (5)

MOCK TEST PAPER
CLASS III
SUBJECT – SST

TIME : 3HRS

M.M. 70

General Instructions

1. All questions are compulsory.
2. Attempt all questions carefully.

SECTION -A

Q1. Fill in the blanks. (5)

1. The new name of Howrah Bridge is _____
2. Popular dance form of Chennai is _____
3. Early man lived in _____
4. There is a factory making tanks at _____ in Chennai.
5. _____ and _____ are an important part of the diet of people living in Kolkata.

Q2. Match the following. (5)

- | | |
|---------------------|-------------------|
| 1. Language | a)Durga puja |
| 2. Sandesh | b) Hugli |
| 3. Festival | c) Sweet dish |
| 4. Rock-cut temples | d) Bengali |
| 5. Rabindra Setu | e) Elephanta Cave |

Q3. Write True or False. (5)

1. Early man wore stitched cotton shirts. _
2. Fire protected early man from cold weather. __
3. Fort St. William is located in Chennai. __
4. Chennai has famous Carnatic music. __
5. Kolkata is connected to the sea through the river Hugli. __

Q4. Tick the correct answer. (5)

1. The film industry of Mumbai is fondly called as
a) Hollywood
b) Bollywood
c) Tollywood
2. The sweet dish of Mumbai
a) Shrikhand
b) Rasogolla
c) Pav-Baji
3. Industries in Kolkata are
a) Textile
b) Leather
c) Both of these

4. Rabindra Setu is in
a) Mumbai
b) Delhi
c) Kolkata
5. Chennai is the capital city of
a) Karnataka
b) Tamil Nadu
c) Kerala

Q5. Rearrange the following letters. (5)

1. NACRATCI
2. PAIOTRR
3. HEACB
4. KSICT
5. RADAMS

Q6. Choose the odd one out. (2)

1. vesthi , dosa , rasogolla, Bharatnatyam
2. BARC, caves, Ganesh Chaturthi, Gate Way of India

Q7. Identify the picture and name the following. (2)



Q8. Define terms. (2)

1. Terminal
2. Howrah Bridge

Q9. Give one word answers. (5)

1. Which is India's richest oilfields ?
2. Name the patron goddess of Mumbai.

3. Name one tourist spot in Chennai .
4. Which world famous cricket ground is situated in Kolkata ?
5. Which is the busiest airports in India?

SECTION -B

Q10. Short answer questions.

(2*5=10)

1. What do you know about the Bombay High?
2. Name the virtues of Mother Teresa which you would like to inculcate.
3. What do the early man eat?
4. Name the popular sweet dish of Kolkata.
5. How is Kolkata connected to the sea ?

Q11. Answer the following questions. (any three)

(3*3 =9)

1. Describe the climate of Mumbai.
2. Describe the transport system in Kolkata.
3. Why is a lot of trade done from Chennai by the sea route ?
4. How is Rabindra Setu different from other ordinary bridges?

Q12. Locate the following on India Political map.

(5)

1. Capital territory of India.
2. The only ocean named after India.
3. Capital of Maharashtra.
4. Largest state – Rajasthan.
5. One metro politican city in West Bengal.

Q13. Dictation

(5)

Q14. Holidays Homework

(5)

C.sc.

1. Look at the picture in Book P.N 95 and type four good manners you learn from it in MS Word 2010. Take Print out and paste it in computer Note-Book.

2. Do Periodic Assessment-2 & Final Examinations Q. Paper in Book P.N 102,103,104.

अभ्यास प्रश्न पत्र – २०१८-१९

शीतकालीन अवकाश गृह कार्य

कक्षा- तीन

(हिंदी)

अधिकतम अंक 70

(खण्ड – क)

प्र01 उपरोक्त गद्यांश को पढ़कर निम्न प्रश्नों के उत्तर दें।

(5 X 1=5)

एक नगर में एक साधु महात्मा आए हुए थे। जब राजा ने ये बात सुनी, तो उन्होंने साधु महात्मा को राजमहल में पधारने के लिए निमंत्रण भिजवाया। साधु जी, राज का निमंत्रण स्वीकार कर राजमहल पहुंचे। जितनी हो सकी, राजा ने उनके स्वागत में, उतनी सारी सेवाएं दी। जब साधु जी वहां से जाने लगे, तब राजा ने उनसे विनती करते हुए कहा कि “कुछ सीख देते हुए जाएं”। साधु महात्मा ने उनके हाथों में एक कागज की बंद पर्ची देते हुए कहा कि – ‘इसे जब खोलना, जब आप पर बहुत भारी संकट या मुश्किल आ पड़े।’ इतना कहकर साधु ने राजा से विदा ली। कुछ सालों बाद राज के नगर पर दूसरे राजा ने चढ़ाई कर दी। उस युद्ध के दौरान उनकी सारी संपत्ति और राज खजाना खर्च हो गया। तब राजा को साधु महात्मा की दी हुई पर्ची याद आई। उन्होंने पल भर भी देर किए बिना वह पर्ची खोली। उसमें लिखा था – “यह हमेशा नहीं रहेगा।” राजा सब समझ गए। अभी उनका बुरा वक्त चल रहा है यह ज्यादा दिन नहीं रहेगा।

निम्न प्रश्नों के उत्तर दें :-

क) नगर में कौन आया हुआ था ?

i) साधु iii) दोनों

ii) राजा iv) कोई नहीं

ख) साधु को राजमहल आने का निमंत्रण किसने भिजवाया ?

i) राजा ने iii) रानी ने

ii) मंत्री ने iv) सेनापति ने

ग) राजा ने साधु के जाने से पहले क्या कहा ?

i) रुपये दें iii) दानों

ii) सीख दें iv) कुछ नहीं

घ) साधु ने राजा को क्या दिया?

i) रुपये iii) पर्ची

ii) सीख iv) कुछ नहीं

ड) दो सर्वनाम शब्द छांटकर लिखो

i) ii)

प्र03 अपठित गद्यांश के आधार पर प्रश्नों के उत्तर दो

(5 X 1=5)

चाचा नेहरू का नाम जवाहरलाल नेहरू था। उनका जन्मदिन 14 नवंबर 1889 को इलाहाबाद में हुआ था। उनके पिता का नाम मोतीलाल नेहरू और उनकी माता का नाम स्वरूपरानी था। नेहरू जी की पढ़ाई-लिखाई इंग्लैंड में हुई थी। बड़े होकर वह महात्मा गांधी के अनुयायी बने और आजादी की लड़ाई में कूद पड़े। भारत के आजाद होने पर वे भारत के पहले प्रधानमंत्री बने। उनके नेतृत्व में भारत में बड़ी उन्नति की।

निम्न प्रश्नों के उत्तर दें

क) चाचा नेहरू का पूरा नाम क्या था?

i) मोतीलाल नेहरू iii) भगत सिंह

ii) जवाहर लाल नेहरू iv) इनमें से कोई नहीं

ख) चाचा नेहरू का जन्म कब हुआ था।

i) 12 नवंबर 1889 iii) 9 नवंबर 1889

ii) 14 नवंबर 1889 iv) 14 दिसंबर 1889

ग) भारत के आजाद होने पर पहले प्रधानमंत्री कौन बने?

i) जवाहर लाल नेहरू iii) नरेंद्र मोदी

ii) मोतीलाल नेहरू iv) शीला दीक्षित

घ) चाचा नेहरू की पढ़ाई लिखाई कहां हुई थी?

i) इंग्लैंड iii) अमेरिका

ii) जयपुर iv) इलाहाबाद

ड) उनके पिता का क्या नाम था ?

i) मोतीलाल नेहरू iii) नरेंद्र मोदी

ii) महात्मा गांधी iv) मोहनलाल नेहरू

(खण्ड - ख)

लेखन कौशल + व्याकरण

(8 + 20 = 28)

प्र.11 अनुच्छेद

विषय :- नीम के लाभ

(4)

- प्र.12 अपने नए मित्र के बारे में बताते हुए दादा जी को पत्र लिखे । (4)
- प्र.13 लिंग बदलो (2 X 1=2)
- (1) कवि
- (2) चूहा
- प्र.14 विलोम शब्द (2 X 1=2)
- (1) प्रश्न
- (2) सरदी
- प्र.15 दो दो पर्यायवाची शब्द लिखो (2 X 1=2)
- (1) सूरज
- (2) आकाश
- प्र.16 अनेक शब्दों के लिए एक शब्द लिखो (3X 1=3)
- (1) बिमारी का ईलाज करने वाला –
- (2) सेना में काम करने वाला –
- (3) जहां ईलाज के लिए जाते है –
- प्र.17 इन मुहावरों के अर्थ लिखो (2 X 1=2)
- (1) घी के दिये जलाना –
- (2) भीगी बिल्ली बनना –
- प्र.18 क्रिया शब्द को रेखांकित (2 X 1=2)
- (1) बाग में मोर नाच रहा हैं ।
- (2) सूरज निकल रहा है।
- प्र.19 निम्न वाक्यों में विशेषण शब्द रेखांकित करो (2 X 1=2)
- (1) गिलास में दूध कम है।
- (2) आकाश में तीन पक्षी उड़ रहे हैं।
- प्र.20 दिए गए वाक्यों में उचित विराम चिह्न लगाओ (2 X 1=2)
- (1) मम्मी चलो बाजार चलें

(2) बस्ते में किताब कॉपी और पेंसिल रखो

प्र.21 गिनती शब्दों में लिखो

(3 X 1=3)

(क) 25 (ख) 41 (ग) 39

(खण्ड ग)

प्र.22 निम्न शब्दों का अर्थ लिखो –

(3 X 1=3)

क) अधर –

ख) आविष्कार –

ग) सवादिष्ट –

प्र.23 सही वाक्य पर (✓) तथा गलत पर (X) का निशान लगाओं

(4X 1= 4)

क) हमें हमेशा बढ़ते जाना चाहिए।

ख) एडीसन की मां एक डाक्टर थी।

ग) स्नान करने से रोम छिद्र बंद हो जाते हैं।

घ) हमें हरी बत्ती पर रूक जाना चाहिए।

प्र.24 सही उत्तर पर (✓) लगाओ

(4X 1= 4)

क) हमें किसके साथ आगे बढ़ना चाहिए ?

- अस्त्र के • शस्त्र के
- अन्न वस्त्र के • इनमें से कोई नहीं

ख) एडीसन ने किस वस्तु की खोज की ?

- बल्ब • खिलौना
- वस्त्र • इनमें से कोई नहीं

ग) किसके न रहने पर सब व्यर्थ है ?

- धन • स्वास्थ्य
- वस्तु • घर

घ) क्या करने से हम आदर पाते हैं?

- शरारत • काम
- लड़ाई • तमाशा

प्र.24 प्रश्न उत्तर (कोई 3) (2 X 3= 6)

- क) हमें किसके बिना आगे बढ़ते रहना चाहिए?
- ख) एडीसन का पूरा नाम क्या था?
- ग) सबसे बड़ा सुख किसे बताया है?
- घ) अस्वस्थ व्यक्ति का स्वभाव कैसा हो जाता है ?
- ड) हमें कब रुकना चाहिए ?

प्र.25 सही उत्तर पर (✓) लगाओ (2X 1= 2)

- क) राजा का स्वभाव कैसा था ?
- लालची
 - कंजूस
 - ईमानदार
- ख) गांधी जी को कितने **कुरते** चाहिए थे ?
- चालीस
 - चालीस हजार
 - चालीस करोड

प्र. 26 - प्रश्न- उत्तर (नन्हीं दुनिया पूरक पुस्तिका) (2X 1= 2)

- क) गांधी जी कुरता क्यों नहीं पहनते थे?
- ख) बालक का मन क्यों पसीज गया ?
- ग) राजा की तबीयत क्यों खराब हो गई थी ?

प्र. श्रुतलेख (5)

प्र. अवकाश गृहकार्य (5)